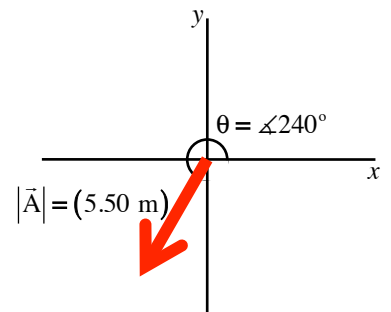
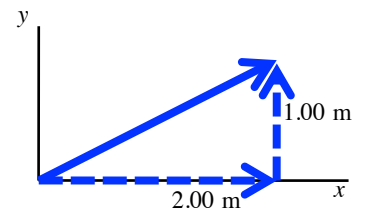


# 3-Series Problem

3.1) Characterize the vector shown to the right in *unit vector notation*.



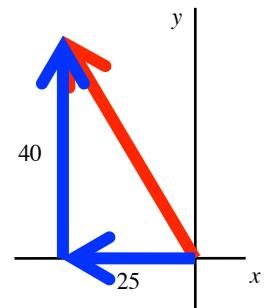
3.3.) The lower-left corner of a window pane is designated “the origin” of a coordinate system. A speck of dust is located at (2.00 m, 1.00 m) as shown in the sketch:



- a.) How far is the speck from the origin?
- b.) Characterize the speck’s position vector in *polar notation*.

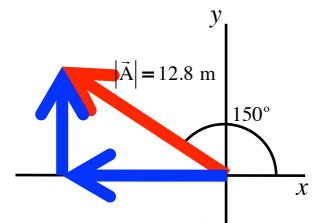
3.13) A hawk moves 200 feet flying parallel to the ground, then angles upward at  $30^\circ$  traveling 135 feet until it angles downward at an angle  $40^\circ$  traveling another 135 feet. Use *graphical vector analysis* to determine its net displacement. (All angles are measured relative to the horizontal.)

3.15) The vector shown to the right has *x* and *y*-components of -25 and 40 meters. Characterize the vector in polar notation.

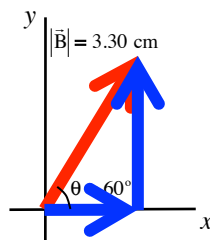


3.19) Characterize the three vectors shown below in *unit vector notation*.

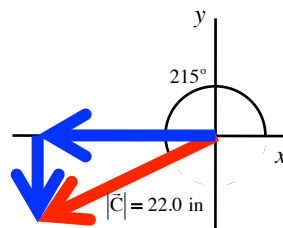
a.)  $(12.8\text{m}) \angle 150^\circ$



b.)  $(3.30\text{cm}) \angle 60^\circ$



c.)  $(22.0 \text{ in}) \angle 215^\circ$



3.23) For the two vectors:  $\vec{A} = 3.00\hat{i} - 2.00\hat{j}$  and  $\vec{B} = -1.00\hat{i} - 4.00\hat{j}$ , determine:

- a.)  $\vec{A} + \vec{B}$
- b.)  $\vec{A} - \vec{B}$
- c.)  $|\vec{A} + \vec{B}|$
- d.)  $|\vec{A} - \vec{B}|$
- e.) the direction of  $\vec{A} + \vec{B}$  and  $\vec{A} - \vec{B}$ .

3.41) An ultra-light glider with a small motor on it moves at 41.0 km/hr at an angle of 60 degrees north of west:

- a.) Characterize its velocity in *unit vector notation*, assuming the *x-axis* is to the east.
- b.) It turns due north after 3.00 hours whereupon its speed drops to 25.0 km/hr.  
Characterize its new velocity in *unit vector notation*.
- c.) Determine its displacement after the first three hours. Characterize it in *unit vector notation*.
- d.) It flies for another 1.50 hours. Characterize its displacement during that last 1.50 hours in *unit vector notation*.
- e.) What is the ultra-light's *net displacement* over its full flight?